

1.


$9 \times 752 =$



1 mark

2.

$561 \div 3 =$



1 mark

3.

[illegible]

1 mark

4.

$$640 \div 8 =$$

--

[illegible]

1 mark

5.

$$7.68 + 13.493 =$$

--

[illegible]

1 mark

6.

$$5 \times 4 \times 10 =$$

--

A blank sheet of white graph paper with a light gray grid pattern. The grid consists of small squares, approximately 1 cm by 1 cm each. There are 20 columns and 15 rows of squares visible. A thick black border surrounds the entire grid area.

1 mark

7.

$$6,600 \div 6 =$$

--

A blank sheet of graph paper with a grid pattern. The grid consists of small squares formed by thin red lines. There are 20 columns and 10 rows of squares. A thick black border surrounds the entire grid area.

1 mark

8.

$$99 \times 10 \times 1 =$$

--

A blank sheet of graph paper with a grid pattern. The grid consists of small squares formed by thin red lines. There are 20 columns and 10 rows of squares. A thicker black border runs along the top and left edges of the page.

1 mark

9.

$$= 9,171 - 530$$

1 mark

10.

--

1 mark

11.

$$4,532 - 19 =$$

--

[illegible]

1 mark

12.

$23 \times 6 =$

--

[illegible]

1 mark

13.

$72 \div 3 =$

--

A blank sheet of graph paper with a grid pattern. The grid consists of small squares formed by thin red lines. There are 20 columns and 10 rows of squares. A thick black border surrounds the entire grid area.

1 mark

14.

$$56.38 + 24.7 =$$


--

[illegible]

1 mark

15.

$6^2 + 10 =$



1 mark

16.

$7,064 - 502 =$



1 mark

17.

$$6 - 5.738 =$$

--

[illegible]

1 mark

18.

- 10 = 298

--

A blank sheet of white graph paper with a light blue grid. The grid consists of small squares, approximately 1 cm by 1 cm each. There are 20 columns and 15 rows of squares. A thicker vertical line runs down the left side, creating a margin. A thicker horizontal line runs across the top, creating a header space. The entire page is framed by a thin black border.

1 mark

19.

$$270 \div 3 =$$

--

[illegible]

1 mark

20.

$$= 5,776 - 855$$

A blank sheet of white graph paper with a light gray grid. The grid consists of small squares, approximately 1 cm by 1 cm. There are 20 columns and 15 rows of squares. A thick black border surrounds the entire grid area.

1 mark

21. $60 \div 15 =$

[illegible]

1 mark

22. $\frac{5}{7} + \frac{3}{21} =$

[illegible]

1 mark

23.

$$10 - 5.4 =$$

--

[illegible]

1 mark

24.

$$\begin{array}{r} 785 \\ \times 23 \\ \hline \end{array}$$

Show your method	

2 marks

25.

$$\frac{3}{4} \text{ of } 1,000 =$$

--

[illegible]

1 mark

26.

$$50 + (36 \div 6) =$$

--

A blank sheet of graph paper with a grid pattern. The grid consists of small squares formed by thin red lines. There are 20 columns and 10 rows of squares. A thick black border runs along the top and left edges of the page.


1 mark

27. $3.9 \times 30 =$



1 mark

28. $\frac{4}{6} \times \frac{3}{5} =$



1 mark

29.

A blank sheet of graph paper with a grid pattern. The grid consists of small squares formed by thin red lines. There are 20 columns and 10 rows of squares. A thick black border surrounds the entire grid area.

$$-100 = 1,059$$

1 mark

30.

$$\frac{2}{5} \times 140 =$$

--

[illegible]

1 mark

31.

$$\begin{array}{r} 418 \\ \times 46 \\ \hline \end{array}$$

Show
your
method

--	--

2 marks

32.

$$\frac{3}{4} - \frac{3}{8} =$$

--

[illegible]

1 mark

33.

$$\frac{2}{6} - \frac{1}{8} =$$

1 mark

34.

$$\frac{1}{4} + \frac{1}{5} + \frac{1}{10} =$$


1 mark

35. $7\% \text{ of } 500 =$



1 mark

36. $15\% \times 1,000 =$



1 mark

39.

$95 \div 5 =$

--

A blank sheet of graph paper with a grid pattern. The grid consists of small squares formed by light blue lines. There are 20 columns and 10 rows of squares. A thick black border surrounds the entire grid area.

1 mark

40.

$$= 936 + 285$$

[illegible]

1 mark

41.

$$89,994 + 7,643 =$$

--

A blank sheet of graph paper with a grid pattern. The grid consists of small squares formed by light blue lines. There are 20 columns and 15 rows of squares. A thick black border surrounds the entire grid area.

1 mark

42.

$$= 435 - 30$$

[illegible]

1 mark

43.

$$96 \div 4 =$$

--

[illegible]

1 mark

44.

$71 \times 8 =$

--

A blank sheet of white graph paper with a light gray grid. The grid consists of small squares, approximately 1 cm by 1 cm. There are 20 columns and 15 rows of squares. A thick black border surrounds the entire grid area.

1 mark

47.

$$3.005 + 6.12 =$$

--

A blank sheet of graph paper with a grid pattern. The grid consists of small squares formed by light blue lines. There are 20 columns and 10 rows of squares. A thick black border surrounds the entire grid area.

1 mark

48.

$$\begin{array}{r} 71 \\ \times 46 \\ \hline \end{array}$$

Show your method	

2 marks

49.


$15 \times 6.1 =$



1 mark

50.

$20\% \text{ of } 1,800 =$



1 mark

51. $\frac{4}{7} + \frac{5}{7} =$



1 mark

52. $29 \overline{)725}$

Show your method	

2 marks

$$\frac{3}{10} - \frac{1}{20} =$$

A blank sheet of graph paper with a grid pattern. The grid consists of small squares formed by light blue lines. There are 20 columns and 15 rows of squares. A thick black border surrounds the entire grid area.

1 mark

$$15\% \times 440 =$$

[illegible]

1 mark

55.

$$\begin{array}{r} 6574 \\ \times \quad 31 \\ \hline \end{array}$$

Show your method	

2 marks

56.

$$43 \overline{) 1118}$$

Show your method	

2 marks

59.

$$987 + 100 =$$

--

A blank sheet of graph paper with a grid pattern. The grid consists of 20 columns and 10 rows of squares, formed by thin red lines. A thick black border surrounds the entire grid area.

1 mark

60.

$689 + 38 =$

A blank sheet of white graph paper with a light gray grid. The grid consists of small squares, approximately 1 cm by 1 cm each. There are 20 columns and 15 rows of squares. A thicker vertical line runs down the left side, creating a margin. A thicker horizontal line runs across the top, creating a header space. The entire page is framed by a thin black border.

1 mark